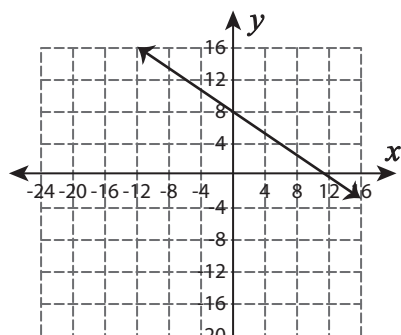


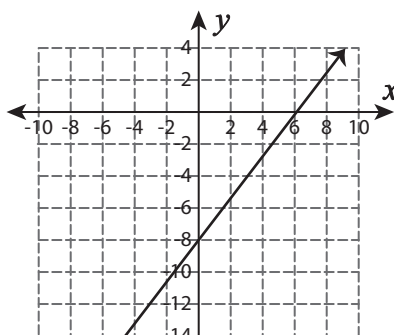
Types of Slope

A) Identify the slope in each graph as positive, negative, zero, or undefined.

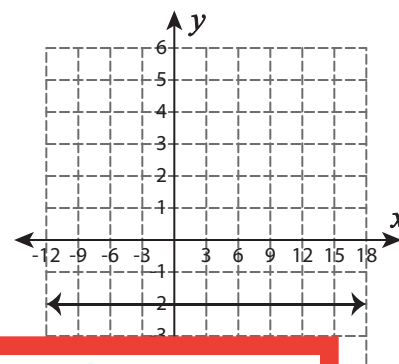
1)



2)



3)



4)

Preview

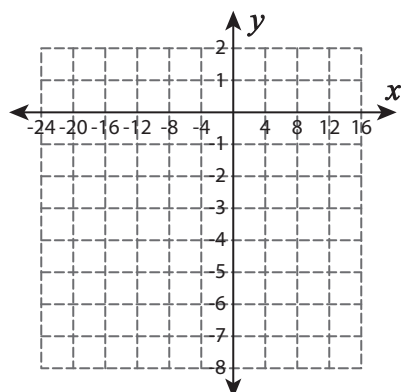
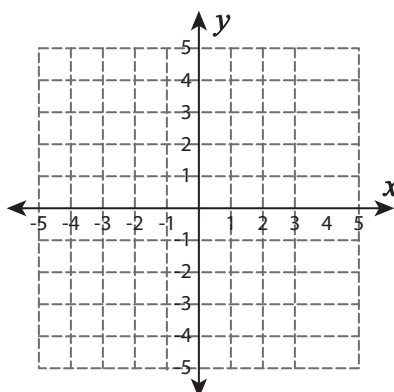
Become a member to unlock
unrestricted access to both printable
and online worksheets.



B) I

www.tutoringhour.com

e.

1) $(8, 1)$ and $(0, -7)$ 2) $(4, 2)$ and $(4, -4)$ 3) $(-3, 5)$ and $(9, -15)$ 