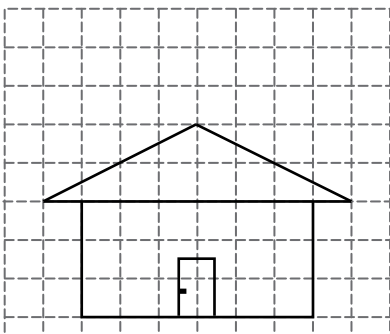


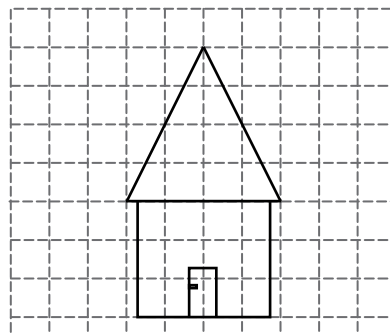
Slope of the Roof

Find the slope of each roof. (The slope should be positive)

1)



2)



3)

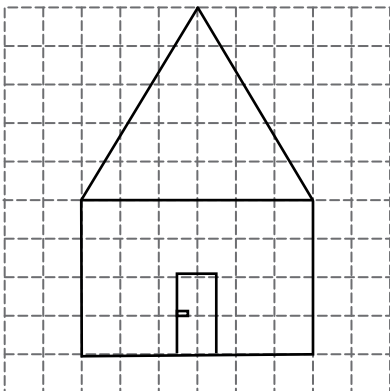
Preview

Become a member to unlock
unrestricted access to both printable
and online worksheets.



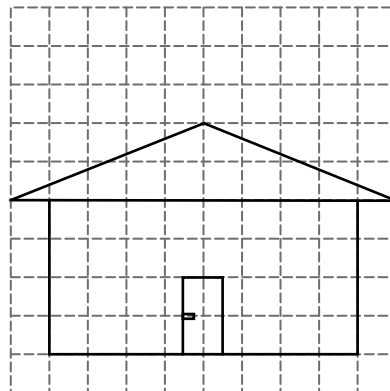
www.tutoringhour.com

5)



Slope of the roof =

6)



Slope of the roof =