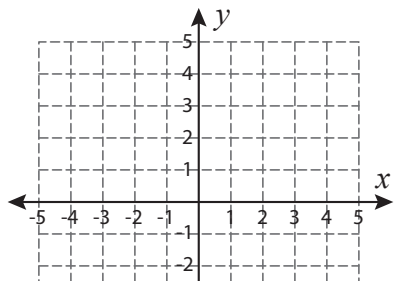


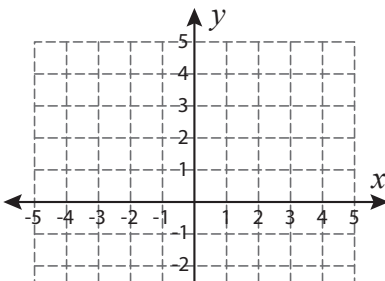
Find the Slope

Graph a line segment by joining the given pair of points. Find the slope.

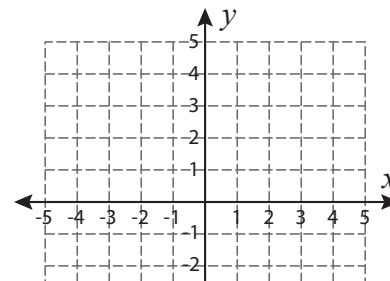
1) $(2, 0)$ and $(0, -3)$



2) $(4, 5)$ and $(2, 1)$



3) $(3, 5)$ and $(-4, -4)$



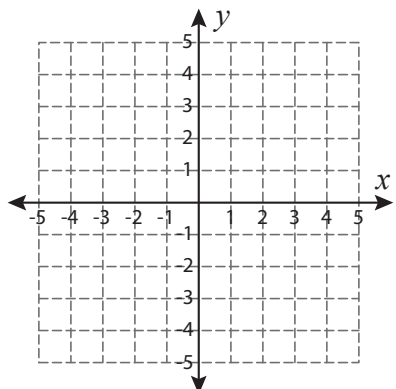
Preview

Become a member to unlock
unrestricted access to both printable
and online worksheets.



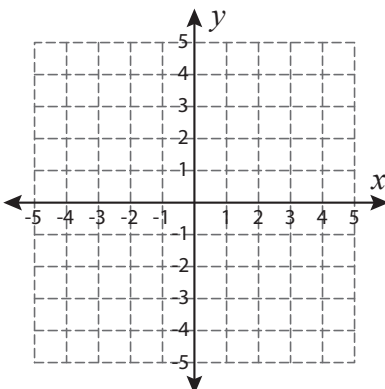
www.tutoringhour.com

7) $(-4, -3)$ and $(3, -3)$



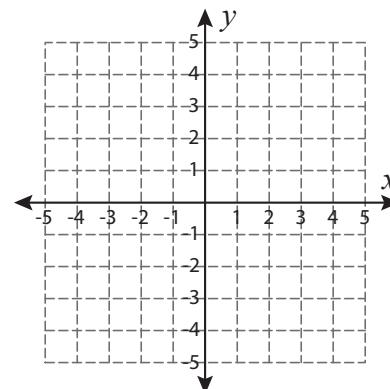
Slope = _____

8) $(1, 1)$ and $(-1, -5)$



Slope = _____

9) $(-5, -3)$ and $(-1, 0)$



Slope = _____