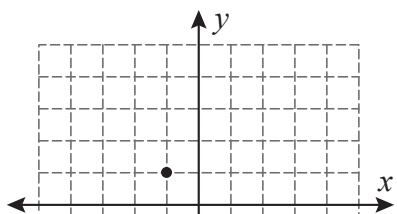


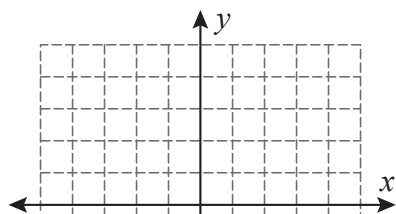
Slope | Graphing

Draw a line through the point for the given slope.

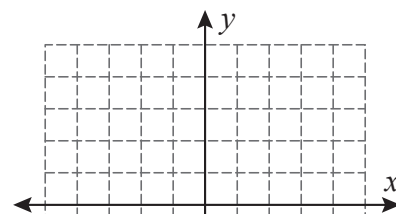
1) Slope = $-\frac{5}{2}$



2) Slope = $\frac{3}{4}$



3) Slope = $-\frac{7}{3}$



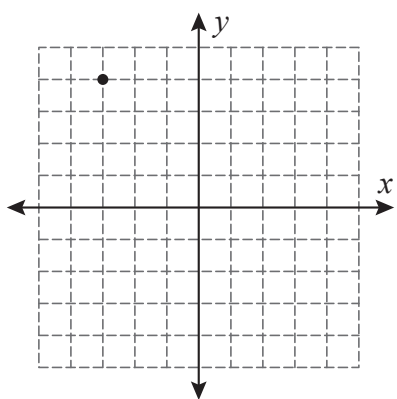
Preview

Become a member to unlock
unrestricted access to both printable
and online worksheets.

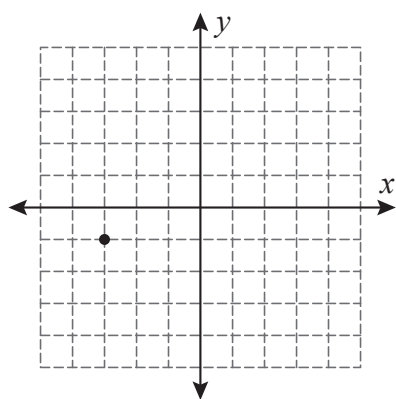


www.tutoringhour.com

7) Slope = $-\frac{7}{5}$



8) Slope = $\frac{5}{6}$



9) Slope = $-\frac{4}{9}$

