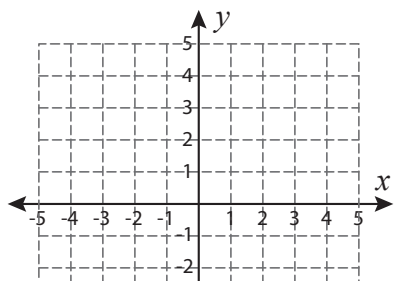


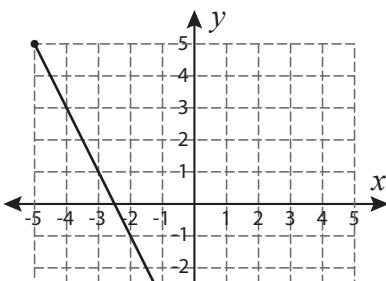
Length | Pythagorean Theorem

Find the length of each line segment using the Pythagorean theorem. Verify the answer using distance formula. Round the answer to the nearest tenth.

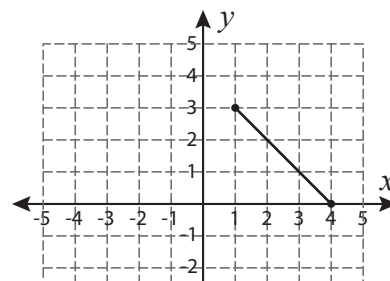
1)



2)



3)



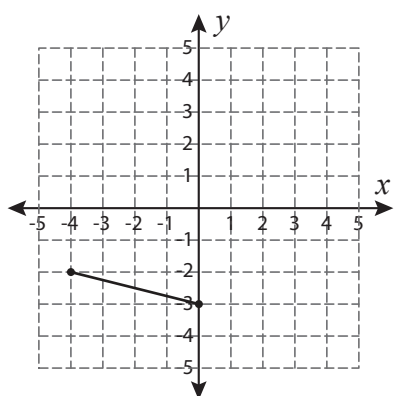
4)

**Become a member to unlock
unrestricted access to both printable
and online worksheets.**

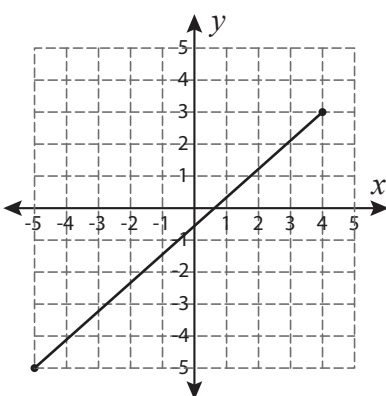


www.tutoringhour.com

7)



8)



9)

