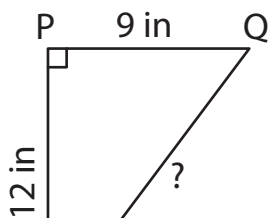


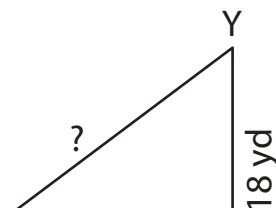
Finding Hypotenuse

Determine the hypotenuse in each right triangle using the Pythagorean theorem.

1)



2)



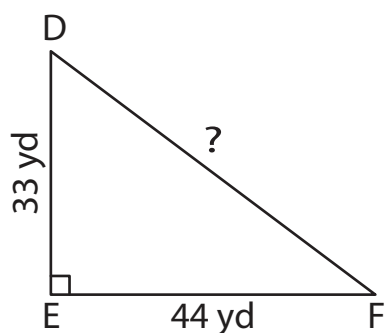
3)

**Become a member to unlock
unrestricted access to both printable
and online worksheets.**



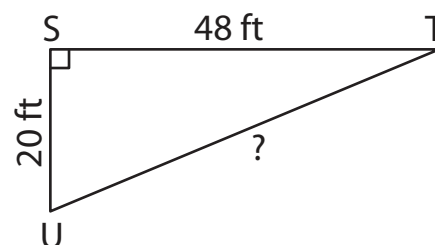
www.tutoringhour.com

5)



DF = _____

6)



TU = _____