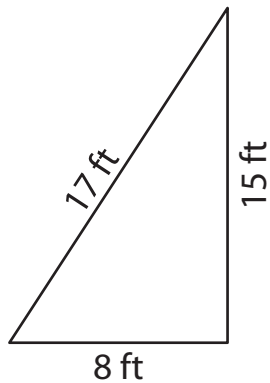


# Is It a Right Triangle?

---

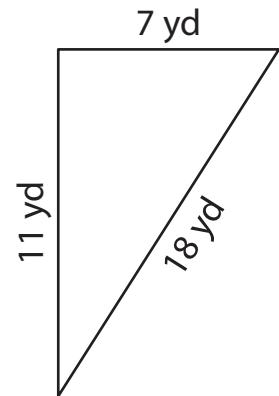
A) State whether each given triangle is a right triangle.

1)



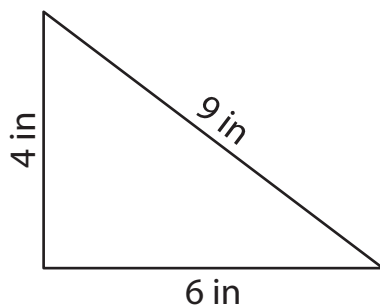
\_\_\_\_\_

2)



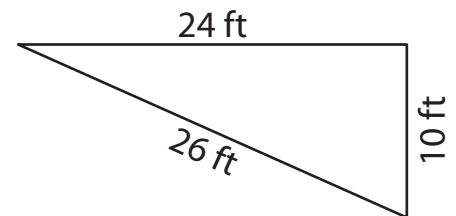
\_\_\_\_\_

3)



\_\_\_\_\_

4)



\_\_\_\_\_

B) 1) A triangle has side lengths of 25 yards, 13 yards, and 16 yards. Is it a right triangle?

a) Yes

b) No

2) Is a triangle whose side lengths measure 4 feet, 3 feet, and 5 feet a right triangle?

a) Yes

b) No