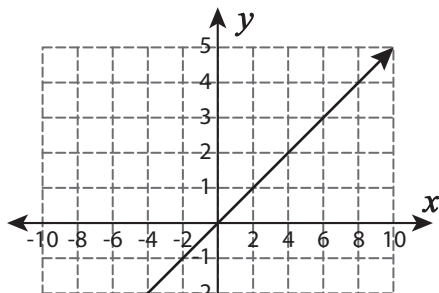


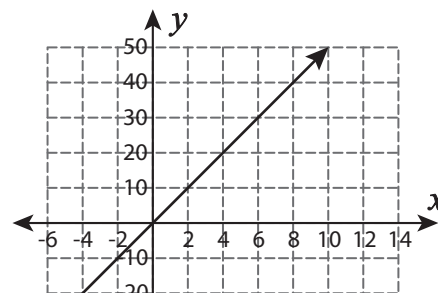
Constant of Proportionality

Identify the constant of proportionality (k) and write the proportional relationship ($y = kx$).

1)



2)



3)

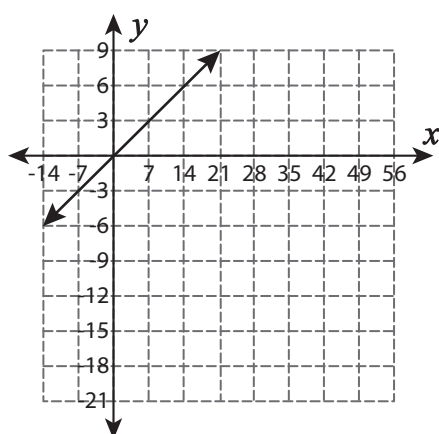
Preview

Become a member to unlock
unrestricted access to both printable
and online worksheets.



www.tutoringhour.com

5)



6)

