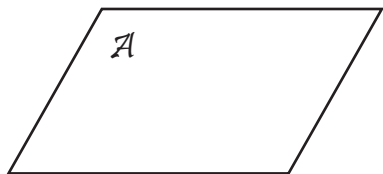


Points, Lines, and Planes

State if each figure is a point, plane, or line and name it.

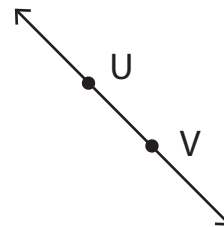
1)



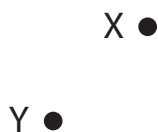
2)




3)



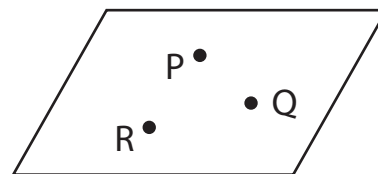
4)



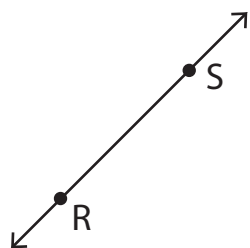
5)



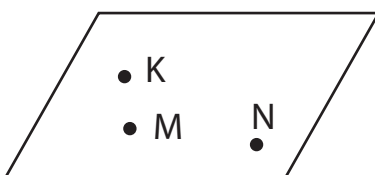
6)



7)



8)



9)