

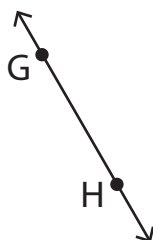
# Points, Lines, and Planes

State if each figure is a point, plane, or line and name it.

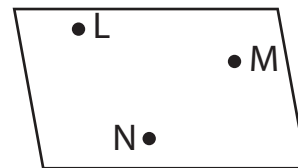
1)



2)



3)



4)

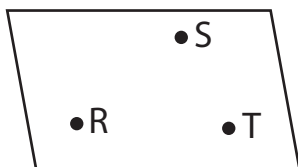
# Preview

Become a member to unlock  
unrestricted access to both printable  
and online worksheets.



[www.tutoringhour.com](http://www.tutoringhour.com)

7)



8)



9)

