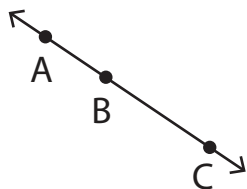


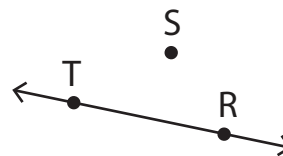
Collinear and Non-Collinear Points

A) Write whether the given points are collinear or not.

1)



2)



The points A, B, and C are _____ . The points R, S, and T are _____ .

3)

Preview

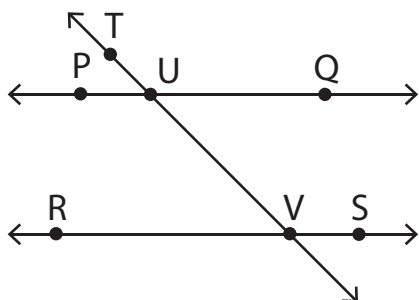
Become a member to unlock
unrestricted access to both printable
and online worksheets.



www.tutoringhour.com

Collinear: _____ Non-Collinear: _____

C) Look at the figure and state whether the given statements are true or false.



1) The points T, U, and V are collinear. True False

2) The points S, V, and R are not collinear. True False