

Collinear and Coplanar Points

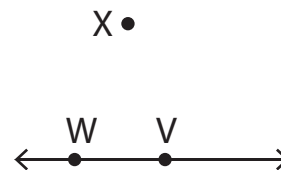
A) Write whether the given points are collinear or not.

1)



Points X, Y, and Z are _____.

2)



Points V, W, and X are _____.

3)

Preview

Become a member to unlock
unrestricted access to both printable
and online worksheets.



www.tutoringhour.com

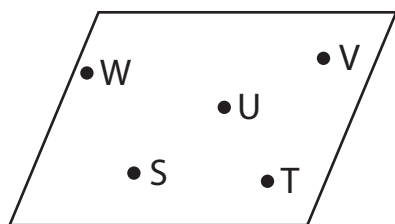
B)

1)

Points K, L, and N are _____.

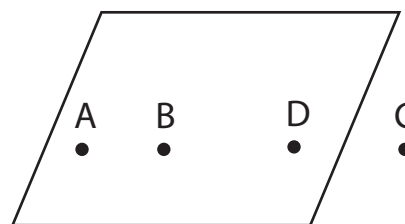
Points Q, R, and S are _____.

3)



Points S, T, and V are _____.

4)



Points A, B, and C are _____.