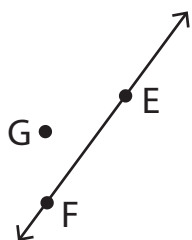


Collinear and Coplanar Points

A) Write whether the given points are collinear or not.

1)



Points E, F and G are _____.

2)



Points S, T, and U are _____.

3)

Preview

Become a member to unlock
unrestricted access to both printable
and online worksheets.



www.tutoringhour.com

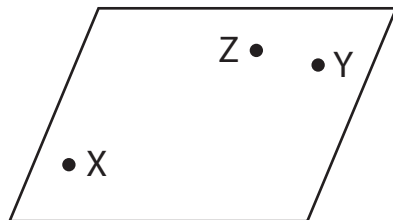
B)

1)

Points U, V, and W are _____.

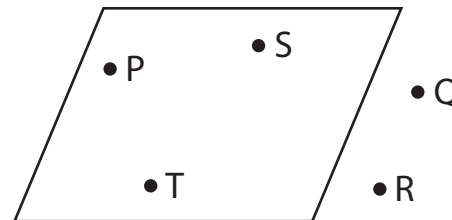
Points D, E, and F are _____.

3)



Points X, Y, and Z are _____.

4)



Points P, Q, and R are _____.