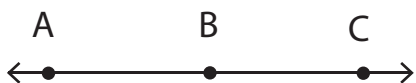


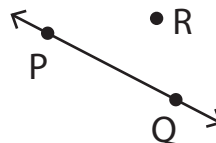
Collinear and Coplanar Points

A) Write whether the given points are collinear or not.

1)



2)



Points A, B, and C are _____.

Points P, Q, and R are _____.

3)

Preview

Become a member to unlock
unrestricted access to both printable
and online worksheets.



www.tutoringhour.com

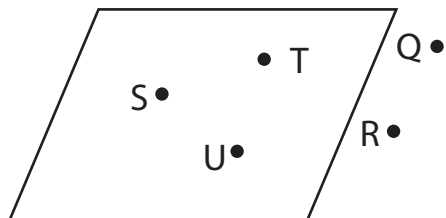
B)

1)

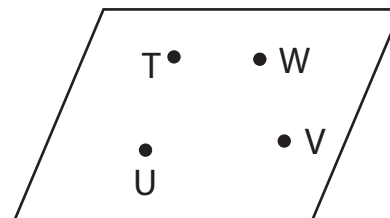
Points B, C, and D are _____.

Points M, N, and Q are _____.

3)



4)



Points Q, R, and S are _____.

Points U, V, and W are _____.