

Decomposing 3-Digit Numbers

A) Decompose each number in multiple ways and fill in the missing numbers.

1) $615 = 6 \text{ hundreds} + 1 \text{ ten} + \underline{\hspace{2cm}} \text{ ones}$

$615 = \underline{\hspace{2cm}} \text{ tens} + 5 \text{ ones}$

$615 = \underline{\hspace{2cm}} \text{ ones}$

2) 5

5

5

3) 3

3

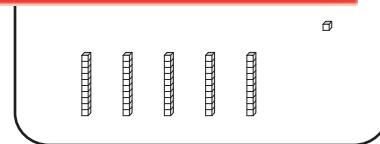
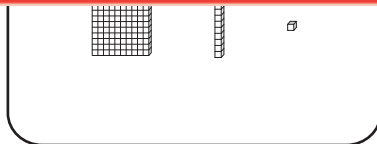
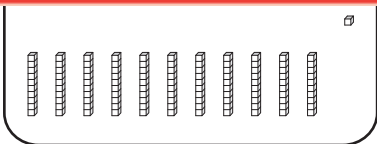
3

B) 1)

Preview

Become a member to unlock
unrestricted access to both printable
and online worksheets.

www.tutoringhour.com



2) Check all the models that accurately illustrate the decomposition of 316.

