

# Decomposing 3-Digit Numbers

A) Decompose each number in multiple ways and fill in the missing numbers.

1)  $178 = \underline{\quad\quad}$  hundreds + 7 tens +  $\underline{\quad\quad}$  ones

$178 = \underline{\quad\quad}$  tens + 8 ones

$178 = \underline{\quad\quad}$  ones

2) 3

3

3

3) 9

9

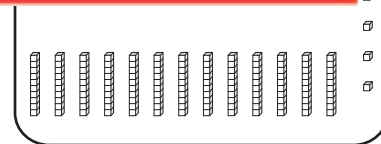
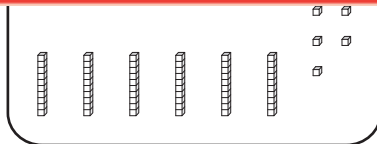
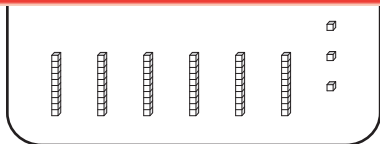
9

B) 1)

# Preview

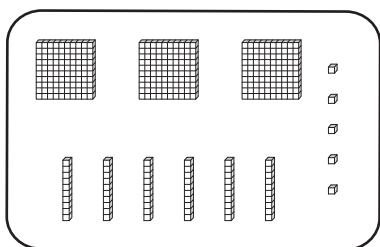
Become a member to unlock  
unrestricted access to both printable  
and online worksheets.

www.tutoringhour.com

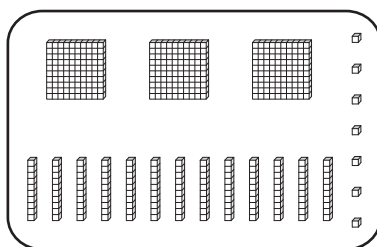


2) Check all the models that accurately illustrate the decomposition of 437.

a)



b)



c)

