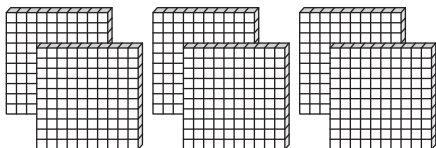


Base Ten Blocks

Write the number formed by each set of base ten blocks.

1)

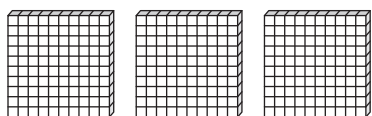


2)

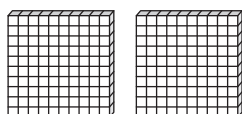
3)

4)

5)



6)



Preview

Become a member to unlock
unrestricted access to both printable
and online worksheets.

www.tutoringhour.com

