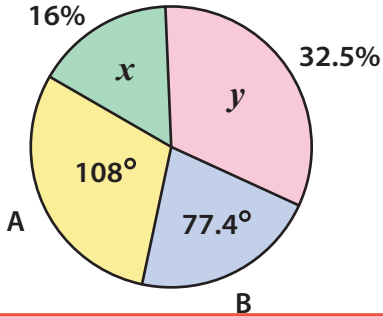


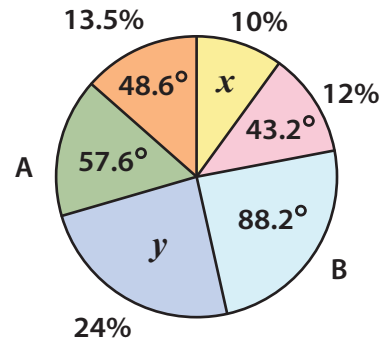
Pie Graph | Finding Missing Parameters

Find the missing parameter for the below pie graphs.

1)



2)



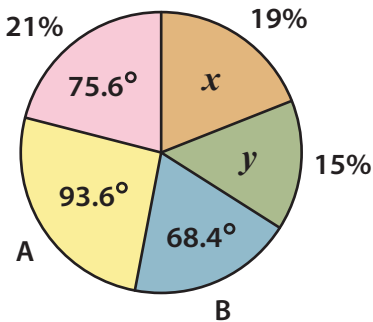
3)

Preview

Become a member to unlock
unrestricted access to both printable
and online worksheets.

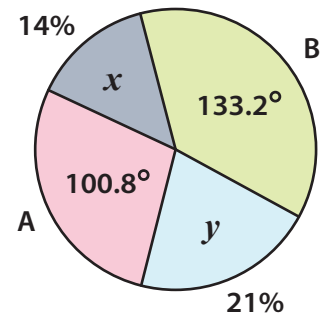
www.tutoringhour.com

5)



A = _____ ; B = _____
 x = _____ ; y = _____

6)



A = _____ ; B = _____
 x = _____ ; y = _____