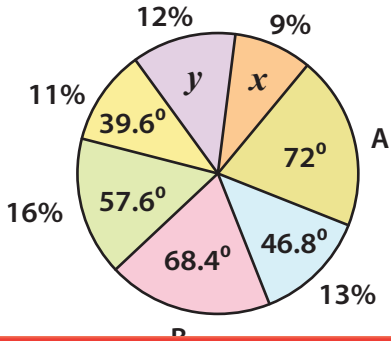


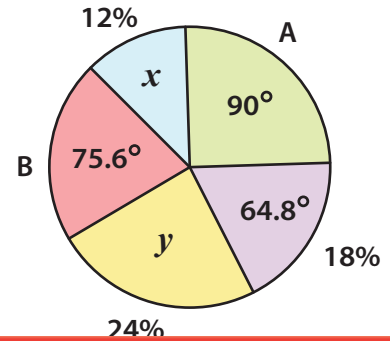
# Pie Graph | Finding Missing Parameters

Find the missing parameter for the below pie graphs.

1)



2)



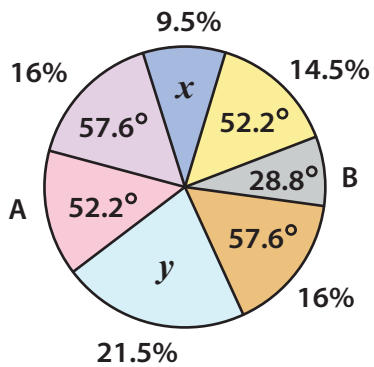
3)

# Preview

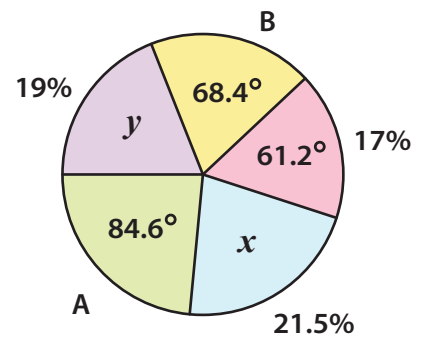
Become a member to unlock  
unrestricted access to both printable  
and online worksheets.

www.tutoringhour.com

5)



6)



A = \_\_\_\_\_ ; B = \_\_\_\_\_

A = \_\_\_\_\_ ; B = \_\_\_\_\_

x = \_\_\_\_\_ ; y = \_\_\_\_\_

x = \_\_\_\_\_ ; y = \_\_\_\_\_