



# Reading and Interpreting Pictographs

1) Martha is making a floral bouquet using roses, daisies, and tulips. The pictograph shows how many flowers of each type she used for the bouquet. Interpret the pictograph and answer the questions.

Martha's Floral Bouquet	
Flowers	Number of Flowers
Rose	
	

i) How many flowers did Martha use to make the bouquet in total?  
\_\_\_\_\_

ii) How many roses and tulips were used in all?  
\_\_\_\_\_

# Preview

Become a member to unlock  
unrestricted access to both printable  
and online worksheets.







www.tutoringhour.com

iv) \_\_\_\_\_  
2) Co \_\_\_\_\_  
ba \_\_\_\_\_  
ea \_\_\_\_\_  
i) \_\_\_\_\_

ii) Which type of ball was more than volleyballs but fewer than footballs?  
\_\_\_\_\_

iii) Which two items accounted for 14 balls?  
\_\_\_\_\_

Soccer ball	
Volleyball	
Football	

 Key = 1 ball

iv) How many soccer balls and volleyballs were ordered in total? \_\_\_\_\_