



Reading and Interpreting Pictographs

- 1) Noah, a swimmer, has won many medals over the years. The chart below illustrates how many medals he collected in 2021 and 2022. Observe the data and answer the following questions.

| Medals Noah Collected | |
|-----------------------|---|
| Years | Number of Medals |
| 2021 |  |
| 2022 |  |

- i) In which year did Noah win more medals?

- ii) How many medals did Noah win in 2021?




Preview


Become a member to unlock
unrestricted access to both printable
and online worksheets.



www.tutoringhour.com

- 2) For a school talent show, a pictograph depicts the number of students who are dancing, singing, or performing a skit. Read the pictograph and answer the questions.
- i) _____
- ii) _____

| School Talent Show | |
|--------------------|---|
| Talents | Number of Students |
| Singing |  |
| Dancing |  |
| Skits |  |

Key
 = 1 student

- i) How many students are singing?

- ii) How many students are displaying their talents in all?
