

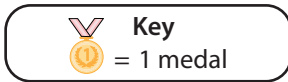


# Reading and Interpreting Pictographs

- 1) Noah, a swimmer, has won many medals over the years. The chart below illustrates how many medals he collected in 2021 and 2022. Observe the data and answer the following questions.

Medals Noah Collected	
Years	Number of Medals
2021	
2022	



- i) In which year did Noah win more medals?

**2022**

- ii) How many medals did Noah win in 2021?

**7 medals**




- 2) For a party, Dustin decorates his living room with balloons. The pictograph depicts how many balloons of different colors Dustin inflates. Read the data and interpret it.

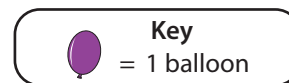
- i) Which color are there 7 balloons of?

**Blue**




- ii) How many red balloons does Dustin blow up?

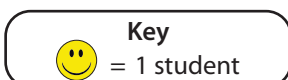
**5 red balloons**

Balloons Decoration	
Colors	Number of Balloons
Blue	
Red	
Green	



- 3) As part of the school talent show, the students in Mr. Howie's class are showcasing their talents in singing, dancing, and skits. The pictograph depicts the number of students who are dancing, singing, or performing a skit. Read the pictograph and answer the questions.

School Talent Show	
Talents	Number of Students
Singing	
Dancing	
Skits	



- i) How many students are singing?

**10 students**

- ii) How many students are displaying their talents in all?

**22 students**