






Reading and Interpreting a Pictograph

Traffic signals are an invaluable tool for the safety of people. The number of traffic signals is different in different counties. The picture graph illustrates how many traffic signals there are in different counties. Read and interpret the graph to answer the questions.

Traffic Signals in Different Counties	
Counties	Number of Traffic Signals
Berkley	
Chatham	
Clay	
Lehigh	
Wayne	

Preview

Become a member to unlock
unrestricted access to both printable
and online worksheets.



www.tutoringhour.com

i)

ii)

iii) _____
Which county has the fewest traffic signals?

iv) _____
Find the total number of traffic signals in the six counties.

v) _____
Find the number of signals in Lehigh County and Chatham County combined.