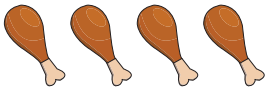



# Reading and Interpreting Scaled Pictographs

- 1) Chef Danny recorded the number of leg pieces he used for his signature chicken dishes in a week. Read and interpret the pictograph and answer the questions below.

Chef's Signature Chicken Dishes	
Dishes	Number of Leg Pieces
Crispy Fried Chicken	
Peri Peri Chicken	

- i) How many leg pieces did the chef use for grilled chicken?  
\_\_\_\_\_

- ii) Find the total number of leg pieces the chef used to make his signature chicken dishes.




# Preview

Become a member to unlock  
unrestricted access to both printable  
and online worksheets.



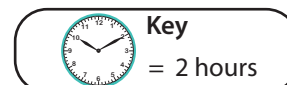
www.tutoringhour.com

- 2) Erica spent time on the following activities:
- iv) How much time did Erica spend on gardening and painting combined?  
\_\_\_\_\_

Gardening	
Painting	
Baking	

- iii) On which activity did Erica spend the most time?

a) Baking   b) Gardening   c) Painting



- iv) How much time did Erica dedicate to painting? \_\_\_\_\_