


Perimeter of a Square

Find the perimeter of each square.

1)




Perimeter = _____

2)




Perimeter = _____

3)



Perimeter = _____


4)



Perimeter = _____

- 5) A square tablecloth has a side length of 4 feet. If Anna wants to sew a decorative border around the edge of the tablecloth, how many feet of fabric will she need?

4 ft



- 6) The park administration plans to install a wooden railing around a square picnic area. If each side measures 8 yards, how many yards of railing will be required?

8 yd

