


# Perimeter of a Square

Find the perimeter of each square.


1)



5 yd

Perimeter = \_\_\_\_\_


2)



8 ft

Perimeter = \_\_\_\_\_

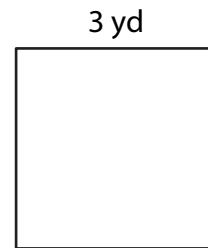
3)



6 in

Perimeter = \_\_\_\_\_


4)



3 yd

Perimeter = \_\_\_\_\_

- 5) Mr. Thompson wants to build a fence around a small vegetable garden, which has a side length of 9 feet. What will be the total length of the fence he needs to build around the garden?



9 ft

\_\_\_\_\_

- 6) Sally is making a square picture frame with each side measuring 7 inches. What is the total length of wood she will need to make the frame?



7 in

\_\_\_\_\_