

Perimeter of a Square

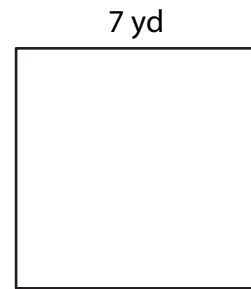
Find the perimeter of each square.

1)




Perimeter = _____

2)




Perimeter = _____

3)



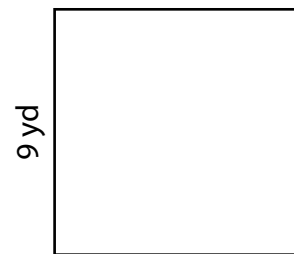
Perimeter = _____

4)



Perimeter = _____

- 5) A square playground has a side length of 9 yards. The school is planning to put a boundary rope around it. How many yards of rope will they need?



- 6) Eric wants to install a border of lights around the square window in the living room. If each side measures 6 feet, what is the total length of lights she will need?

