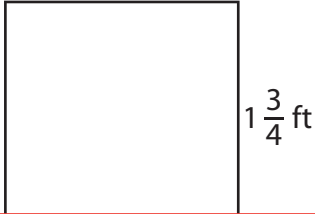


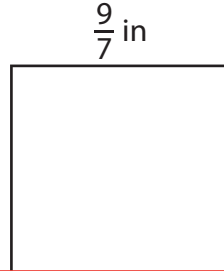
# Perimeter of a Square

Find the perimeter of each square.


1)



2)



3)



Perim

# Preview

4)

Become a member to unlock  
unrestricted access to both printable  
and online worksheets.

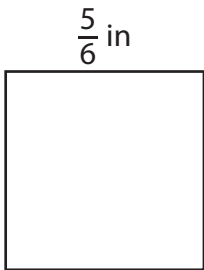
 $\frac{11}{8}$  yd

Perim

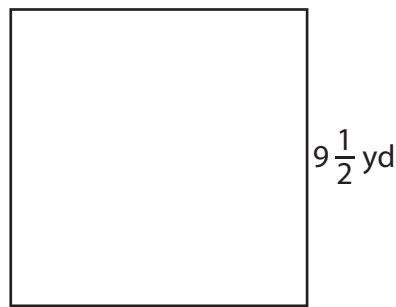
www.tutoringhour.com



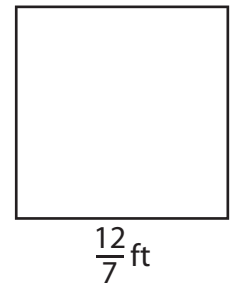
7)



8)



9)



Perimeter = \_\_\_\_\_

Perimeter = \_\_\_\_\_

Perimeter = \_\_\_\_\_