


Perimeter of a Square


Find the perimeter of each square.

1)

15.5 in



2)



3)



Per

Preview

4)

Become a member to unlock
unrestricted access to both printable
and online worksheets.



Per

www.tutoringhour.com

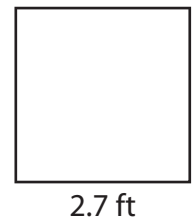
7)



8)



9)



Perimeter = _____

Perimeter = _____

Perimeter = _____