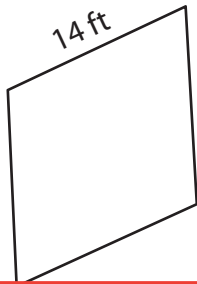


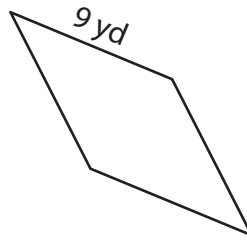
# Perimeter of a Rhombus

Find the perimeter of each rhombus.

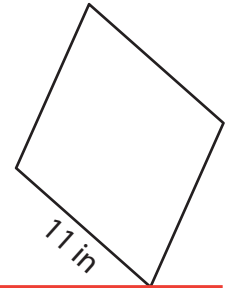
1)



2)



3)



Per

## Preview

4)

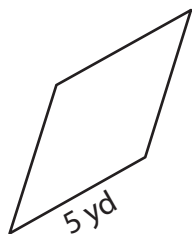
Become a member to unlock  
unrestricted access to both printable  
and online worksheets.

Per

www.tutoringhour.com

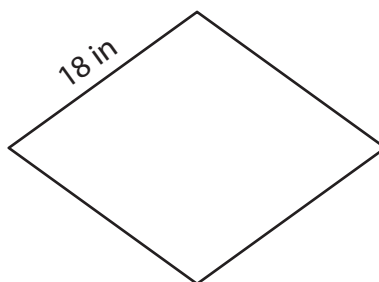


7)




Perimeter = \_\_\_\_\_

8)



Perimeter = \_\_\_\_\_

9)



Perimeter = \_\_\_\_\_