

# Perimeter of a Rectangle

Answer Key

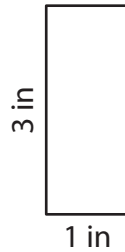
Find the perimeter of each rectangle.

1)



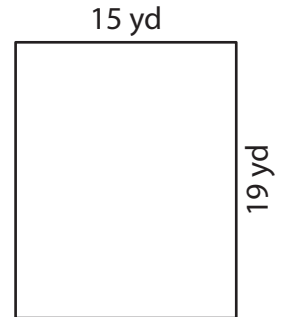
Perimeter = 62 ft

2)



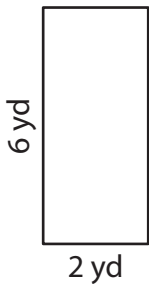
Perimeter = 8 in

3)



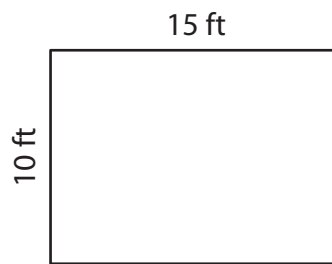
Perimeter = 68 yd

4)



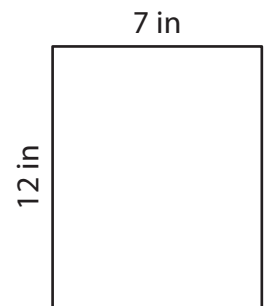
Perimeter = 16 yd

5)



Perimeter = 50 ft

6)



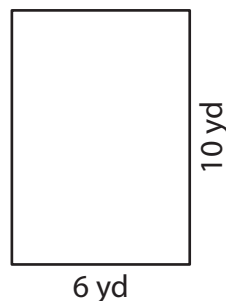
Perimeter = 38 in

7)



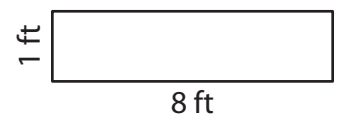
Perimeter = 54 in

8)



Perimeter = 32 yd

9)



Perimeter = 18 ft