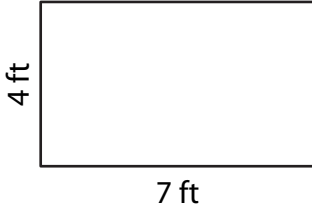


# Perimeter of a Rectangle

Answer Key

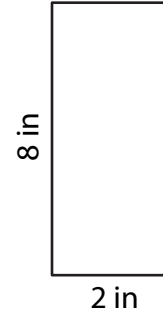
Find the perimeter of each rectangle.

1)



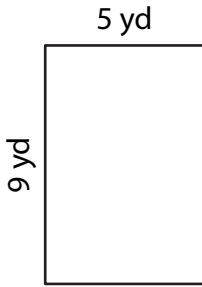
Perimeter = 22 ft

2)



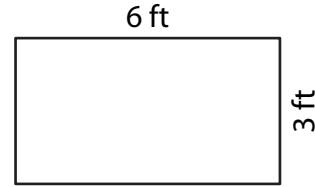
Perimeter = 20 in

3)



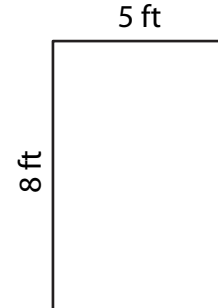
Perimeter = 28 yd

4)



Perimeter = 18 ft

5) A rectangular billboard measures 8 feet in length and 5 feet in width. What is the perimeter of the billboard?



26 feet

6) Mr. Brown has a rectangular garden that is 9 yards long and 7 yards wide. He wants to place a path around the garden. What is the total length of the path?



32 yards