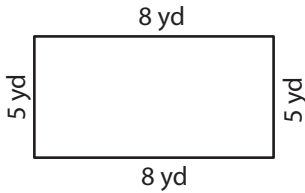


# Perimeter of a Quadrilateral

Answer Key

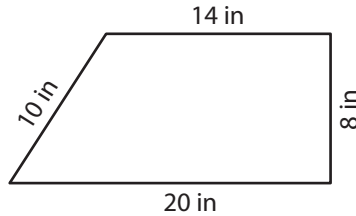
Find the perimeter of each quadrilateral.

1)



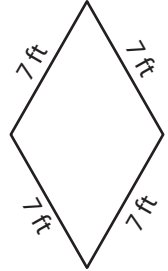
Perimeter = 26 yd

2)



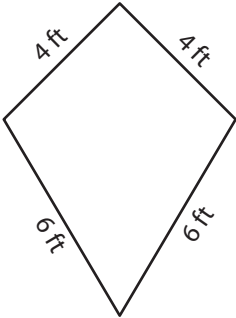
Perimeter = 52 in

3)



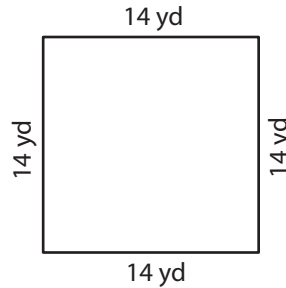
Perimeter = 28 ft

4)



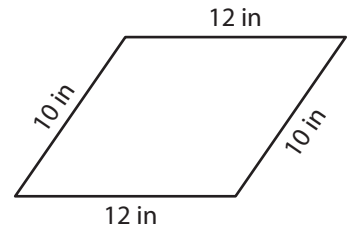
Perimeter = 20 ft

5)



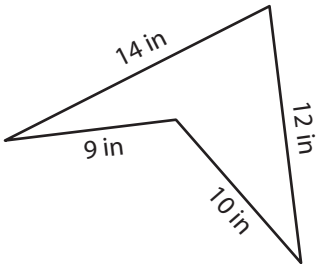
Perimeter = 56 yd

6)



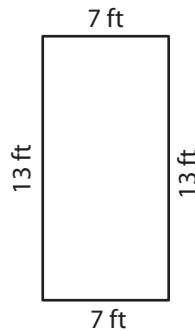
Perimeter = 44 in

7)



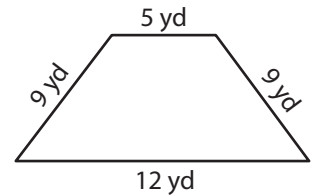
Perimeter = 45 in

8)



Perimeter = 40 ft

9)



Perimeter = 35 yd