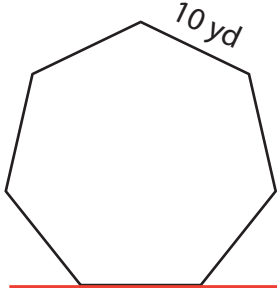


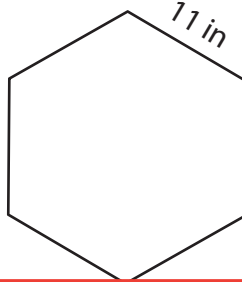
Perimeter of a Polygon

Find the perimeter of each regular polygon.

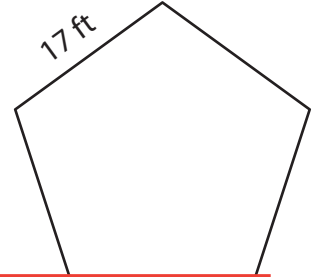
1)



2)



3)



Peri

Preview

4)

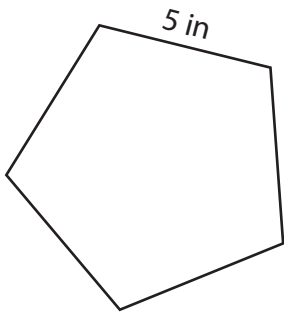
Become a member to unlock
unrestricted access to both printable
and online worksheets.

Peri

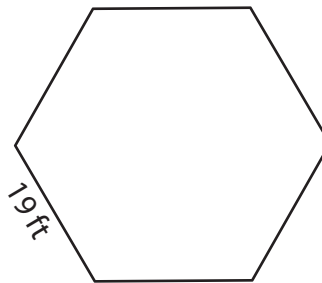
www.tutoringhour.com



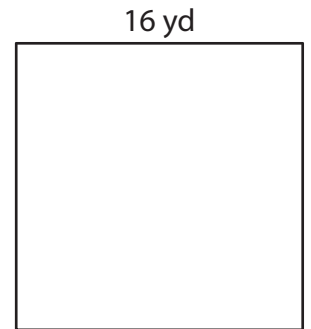
7)



8)



9)



Perimeter = _____

Perimeter = _____

Perimeter = _____