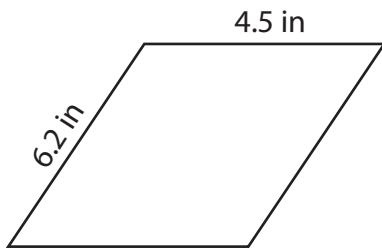


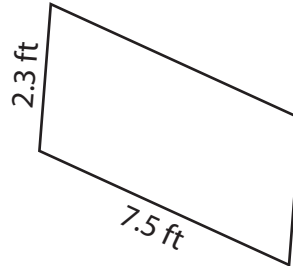
Perimeter of a Parallelogram

Find the perimeter of each parallelogram.

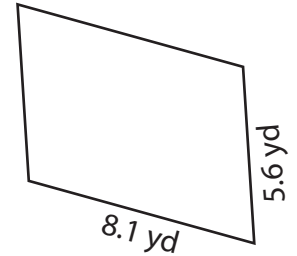
1)



2)



3)



Per

Preview

4)

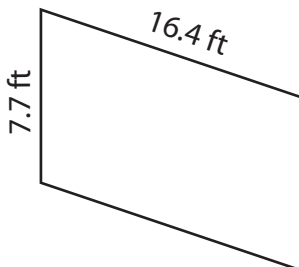
Become a member to unlock
unrestricted access to both printable
and online worksheets.

Per

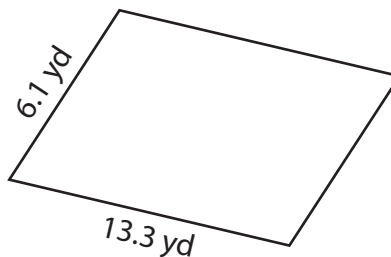
www.tutoringhour.com



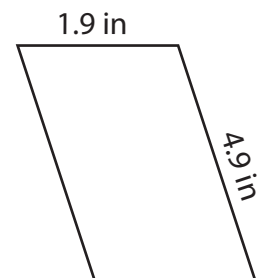
7)



8)



9)



Perimeter = _____

Perimeter = _____

Perimeter = _____