

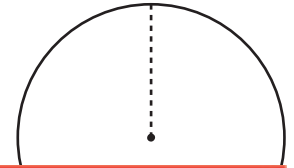
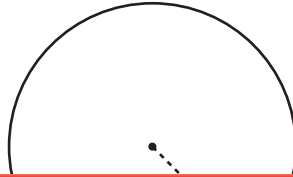
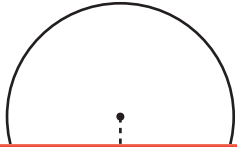
# Finding the Radius Using the Circumference

Find the radius of each circle using the given circumference. Round your answer to the nearest tenth. (Use 3.14 for  $\pi$ .)

1) Circumference: 36.3 yd

2) Circumference: 100 ft

3) Circumference: 56.5 in



# Preview

Become a member to unlock  
unrestricted access to both printable  
and online worksheets.



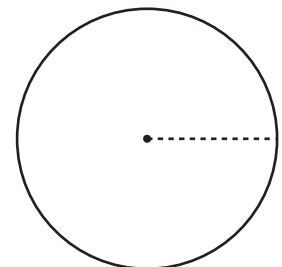
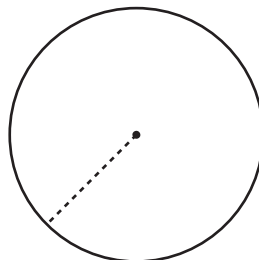
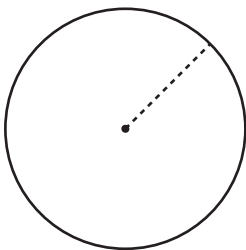
[www.tutoringhour.com](http://www.tutoringhour.com)

4) Cir

7) Circumference: 46.7 in

8) Circumference: 64 yd

9) Circumference: 84.2 ft



\_\_\_\_\_

\_\_\_\_\_

\_\_\_\_\_