

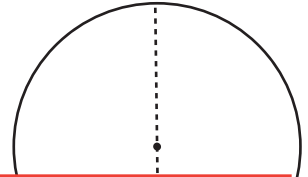
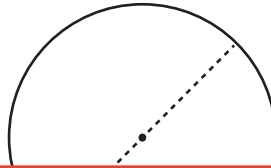
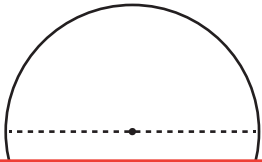
Finding the Diameter Using the Circumference

Find the diameter of each circle using the given circumference. Round your answer to the nearest tenth. (Use 3.14 for π .)

1) Circumference: 43.9 in

2) Circumference: 25 ft

3) Circumference: 64.2 yd



Preview

Become a member to unlock
unrestricted access to both printable
and online worksheets.



www.tutoringhour.com

4) Cir

7) Circumference: 12.6 ft

8) Circumference: 57 yd

9) Circumference: 29.8 in

