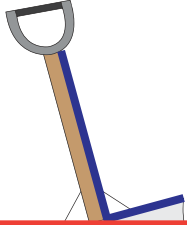


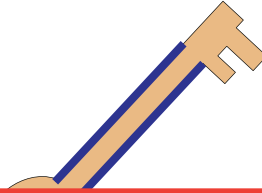
Real-life Parallel and Perpendicular Lines

Identify the highlighted pair of lines in each object as parallel or perpendicular.

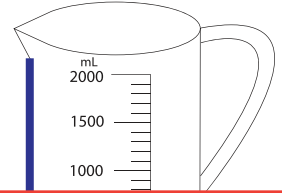
1)



2)



3)



4)

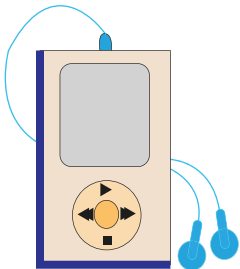
Preview

Become a member to unlock
unrestricted access to both printable
and online worksheets.



www.tutoringhour.com

7)



8)



9)

