

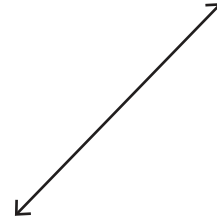
Perpendicular Lines

Draw a line perpendicular to each given line.

1)



2)



3)

Preview


Become a member to unlock
unrestricted access to both printable
and online worksheets.



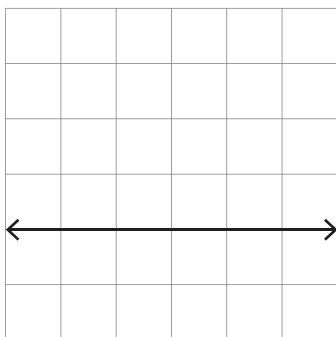
www.tutoringhour.com

Draw

5)



7)



8)

