



Ordered Pairs | Drawing Shapes

Plot the points and join them in the given order. Complete each figure by connecting the start and endpoints. Identify the shape formed.

1) $(3, 1), (3, 9), (7, 7), (7, 3)$



2) $(1, 4), (3, 7), (7, 7), (9, 4), (5, 2)$



Preview

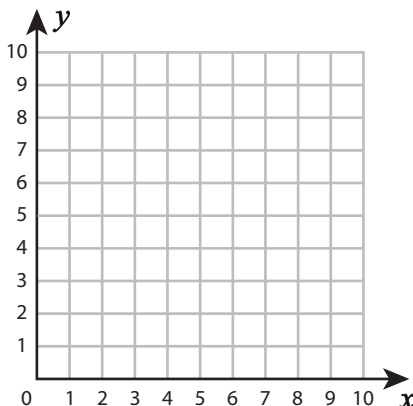
3) (2,

Become a member to unlock
unrestricted access to both printable
and online worksheets.



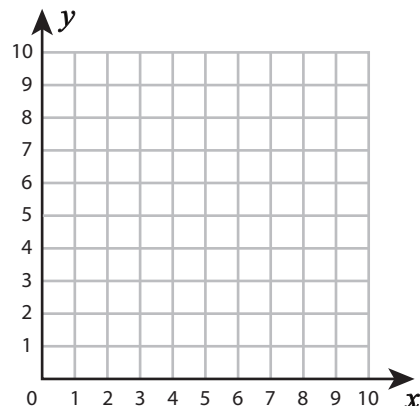
www.tutoringhour.com

5) $(5, 3), (5, 8), (8, 8), (8, 3)$



Shape: _____

6) $(3, 2), (3, 7), (8, 7), (8, 2)$



Shape: _____