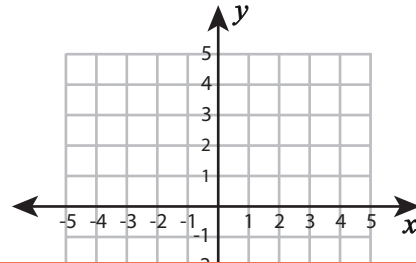
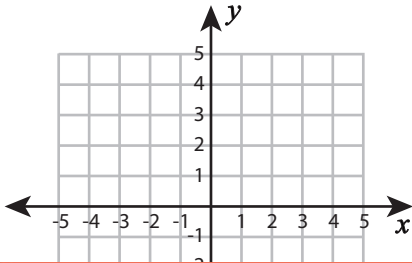


# Ordered Pairs | Drawing Shapes

Plot the points and join them in the given order. Complete each figure by connecting the start and endpoints. Identify the shape formed.

1)  $(-5, 3), (3, 3), (3, -5), (-5, -5)$

2)  $(-4, 3), (-2, 5), (2, 5), (4, 3)$



# Preview

3) (1,

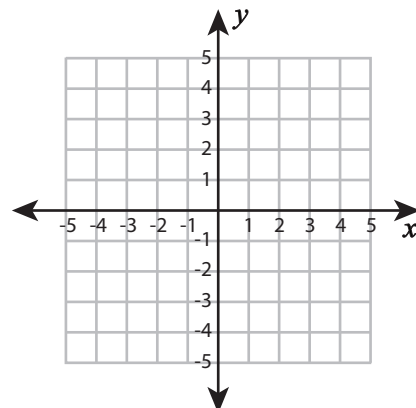
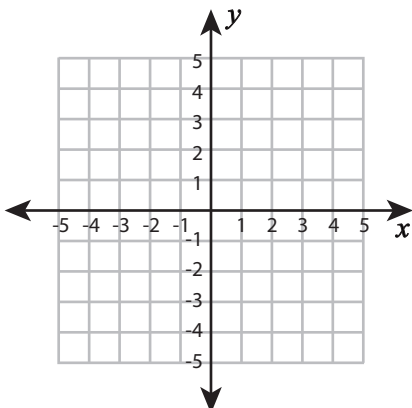
Become a member to unlock  
unrestricted access to both printable  
and online worksheets.



[www.tutoringhour.com](http://www.tutoringhour.com)

5)  $(-2, -3), (1, -3), (1, -4), (-2, -4)$

6)  $(-4, -2), (-2, -2), (-2, -4)$



Shape: \_\_\_\_\_

Shape: \_\_\_\_\_