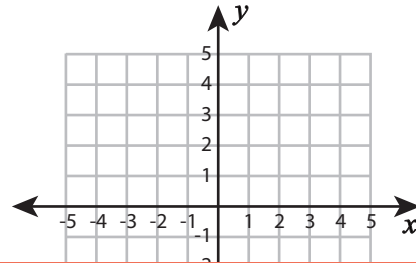
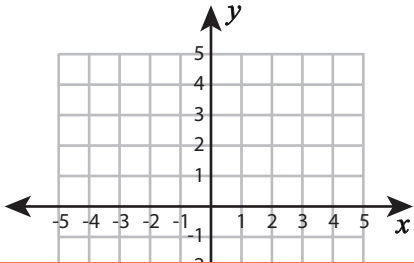


Ordered Pairs | Drawing Shapes

Plot the points and join them in the given order. Complete each figure by connecting the start and endpoints. Identify the shape formed.

1) $(-1, -2), (4, -2), (3, -4), (-2, -4)$

2) $(-1, -1), (0, 1), (1, -1)$



Preview

3) (2,

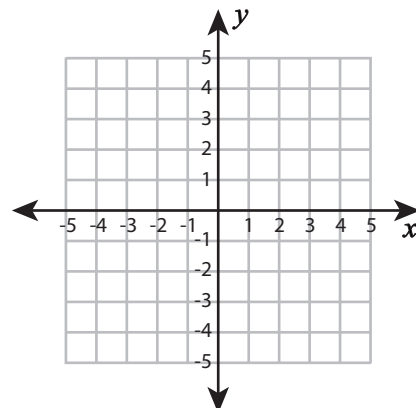
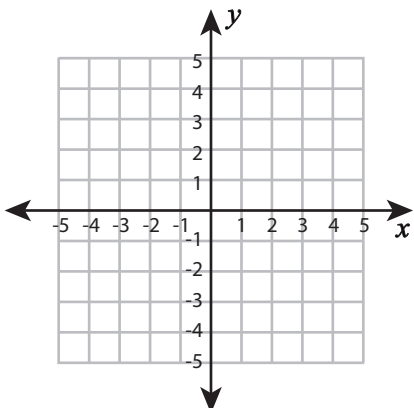
Become a member to unlock
unrestricted access to both printable
and online worksheets.



www.tutoringhour.com

5) $(5, 0), (3, -2), (1, -1), (1, 1), (3, 2)$

6) $(-4, 2), (0, 2), (0, -2), (-4, -2)$



Shape: _____

Shape: _____