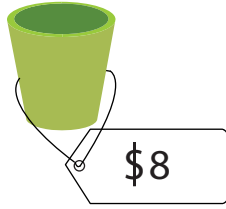


Calculating the Total Price

- 1) Ian ordered 6 planters online. If the price of each planter was \$8, what will Ian's bill amount to?



$$\underline{\quad} \times \underline{\quad} = \underline{\quad}$$

- 2) A
k
m
k

Preview

Become a member to unlock
unrestricted access to both printable
and online worksheets.

www.tutoringhour.com

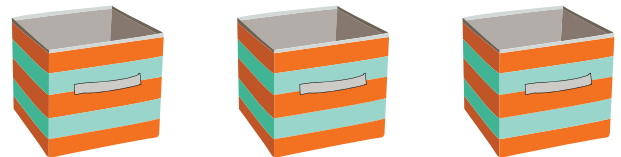
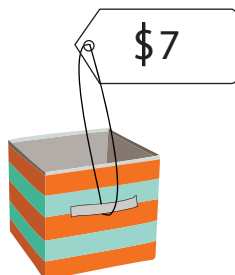


- 3) M
s
p
m

sleep pants?

$$\underline{\quad} \times \underline{\quad} = \underline{\quad}$$

- 4) Tess purchased 3 storage bins. If each bin was priced at \$7, how much did she pay for the bins?



$$\underline{\quad} \times \underline{\quad} = \underline{\quad}$$