



Multiplying by 2, 5, or 10

- 1) Paula used 9 grapes to make one grape caterpillar. How many grapes will she need to make 10 such caterpillars?



$$9 \times 10 = \underline{\hspace{2cm}}$$

- 2) Pamela bought 5 dinosaur toy sets, with 4 dinosaur toys in each. How many dinosaur toys did Pamela buy?



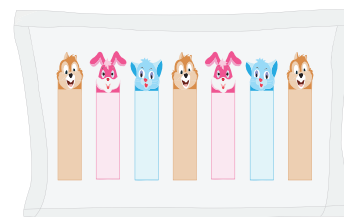
$$4 \times 5 = \underline{\hspace{2cm}}$$

- 3) Tyler buys 2 tie hangers. If each hanger can hold 8 ties, how many ties can he hang in all?



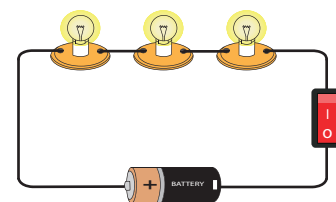
$$8 \times 2 = \underline{\hspace{2cm}}$$

- 4) Ms. Lewis bought 5 packs of animal bookmarks, with 7 bookmarks in each. How many bookmarks did she buy in all?



$$7 \times 5 = \underline{\hspace{2cm}}$$

- 5) As part of a science project, the students built 10 circuits using 3 bulbs for each. How many bulbs did they use in all?



$$3 \times 10 = \underline{\hspace{2cm}}$$