


Multiplying by 2, 5, or 10

- 1) Adriana, a chef, used 5 boxes of crunchy taco shells, with 8 taco shells in each box. How many taco shells did she use?



$$8 \times 5 = \underline{\hspace{2cm}}$$

- 2) Molly, an artist, bought 2 packs of canvas panels, with 10 panels in a pack. How many panels did she buy?

Preview

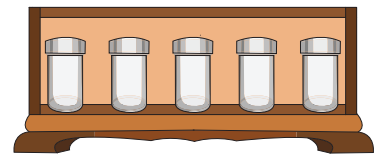
Become a member to unlock
unrestricted access to both printable
and online worksheets.

www.tutoringhour.com

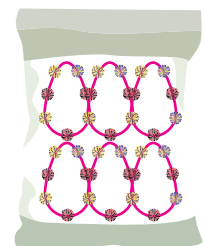


- 3) Liam bought 2 packs of markers, with 10 markers in each pack. How many markers did he buy?
- 4) Emily bought 5 packs of highlighters, with 6 highlighters in each pack. How many highlighters did she buy?

$$5 \times 2 = \underline{\hspace{2cm}}$$



- 5) Ashton bought 5 packs of pom pom garlands, with 6 garlands in each pack. How many garlands did Ashton buy?



$$6 \times 5 = \underline{\hspace{2cm}}$$