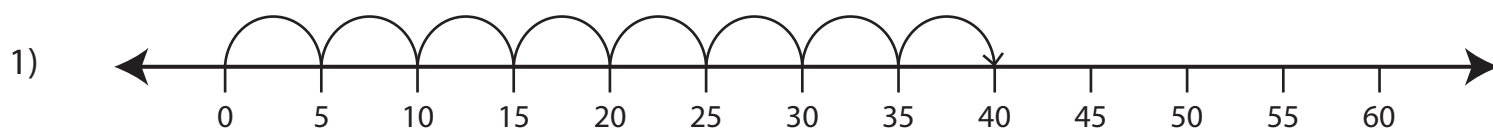


# Multiplication Using Number Lines

Choose the multiplication sentence that describes each model.




a)  $7 \times 5 = 35$

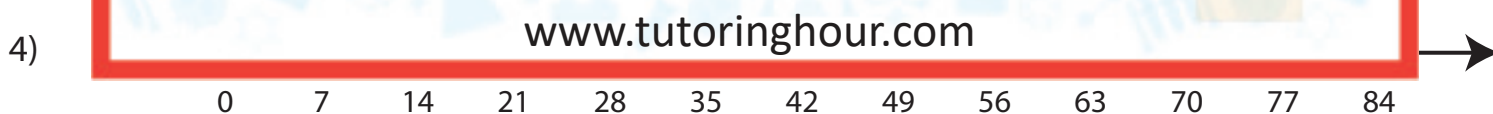
b)  $5 \times 4 = 20$

c)  $5 \times 6 = 30$

d)  $8 \times 5 = 40$

2) 

3) 

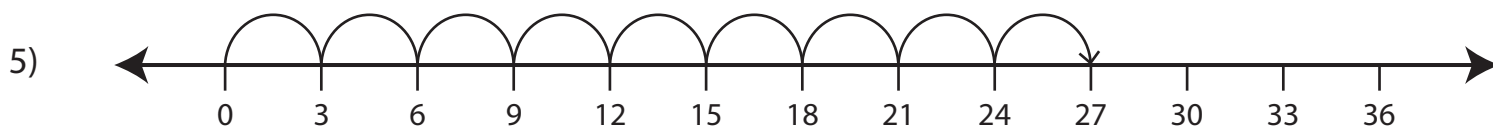


a)  $4 \times 7 = 28$

b)  $7 \times 3 = 21$

c)  $5 \times 7 = 35$

d)  $7 \times 2 = 14$



a)  $7 \times 3 = 21$

b)  $3 \times 4 = 12$

c)  $3 \times 5 = 15$

d)  $9 \times 3 = 27$