

# Equal Groups

Write a multiplication equation to describe each model.

1)



$$\square \times \square = \square$$

2)

# Preview

Become a member to unlock  
unrestricted access to both printable  
and online worksheets.



www.tutoringhour.com

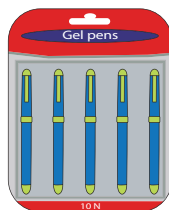
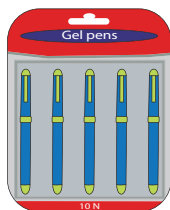

3)

4)



$$\square \times \square = \square$$

5)



$$\square \times \square = \square$$