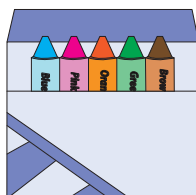
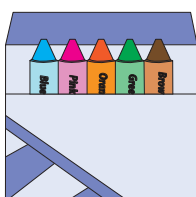


# Equal Groups

Answer Key




Write a multiplication equation to describe each model.

1)



$$2 \times 5 = 10$$

2)



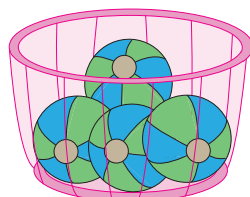
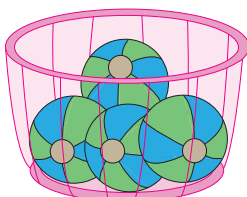
$$3 \times 3 = 9$$

3)



$$4 \times 5 = 20$$

4)



$$2 \times 4 = 8$$

5)



$$5 \times 3 = 15$$