



# Equal Groups

- A) Patricia has 2 baskets of apples. If each basket has 5 apples, how many apples does Patricia have in all?




## Preview

Become a member to unlock  
unrestricted access to both printable  
and online worksheets.

www.tutoringhour.com

C)

1)







a)  $3 \times 3 = 9$

b)  $3 \times 4 = 12$

c)  $3 \times 2 = 6$

2)



a)  $4 \times 4 = 16$

b)  $4 \times 3 = 12$

c)  $4 \times 2 = 8$