



Multiplication with Arrays

Write the multiplication sentence that describes each array.

1)



2)




3)

**Become a member to unlock
unrestricted access to both printable
and online worksheets.**



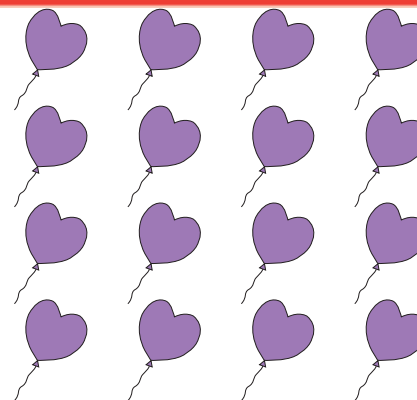
www.tutoringhour.com

5)



$$\square \times \square = \square$$

6)



$$\square \times \square = \square$$